



NETBALL
NEW ZEALAND

Name: _____

Centre: _____

Zone: _____

ZONE THEORY EXAM

3 August 2015

Time allowed: 1 hour

INSTRUCTIONS TO CANDIDATES

PLEASE READ THESE CAREFULLY BEFORE COMMENCING THE PAPER

- 1 Write your name, Centre and Zone in the spaces at the top of this page.
- 2 Use only a blue or black pen. Cross out any work not to be marked. Any work in pencil or using Correction Fluid will NOT be marked.
- 3 Answer all questions in this printed exam booklet. If you have insufficient space for an answer, use any space on the back of the paper or you may use your own paper. Be sure to put your name on any extra sheets and label questions carefully. Make sure any extra sheets are handed in with your paper.
- 4 Teams referred to are BLACK and WHITE.
- 5
 - (a) It is NOT necessary to specify the infringer must stand beside and away from the player taking the penalty.
 - (b) Similarly, it is NOT necessary to specify the Umpire blows the whistle when penalising an infringement.
- 6 Check you have 26 questions in this exam booklet.
- 7 Read all questions carefully and answer only what is asked clearly and concisely.
- 8 For infringements where a general statement can cover a wide range of specific infringements, the specific statement must be used.

General: Incorrect throw in
Specific: Throw in from an offside area
- 9 There are **50 marks available**. You must gain **42½ marks (85%)** in order to pass.
Mark allocations for each question are shown in brackets.

Total Mark	Result
------------	--------

1. Before the start of play the Umpires must inspect the players.
- a) Where does this occur? _____
- b) Name three items the Umpire is checking for:
- (i) _____
- (ii) _____
- (iii) _____ (2)

2. Before the start of play the Umpires toss for goal end.
- a) When does this occur? _____
- b) Which half of the Court does the Umpire who wins the toss control?
- _____ (1)

3. Who are the people who make up the Team Bench?
- _____
- _____ (2)

4. What is each of these hand signals indicating?



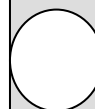




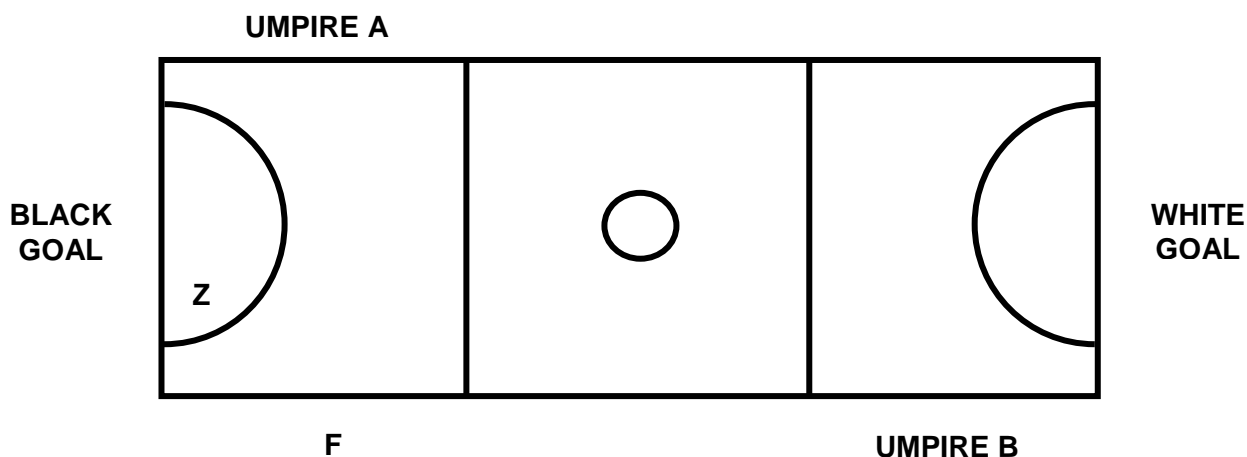


_____ (2)

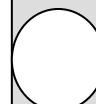
5. a) What is the length of the Court? _____
- b) What is the radius of the Goal Circle? _____
- c) What is the length of a stoppage for blood? _____
- d) What is the length of a subsequent injury stoppage? _____ (2)



Refer to the Court diagram below for Questions 6 and 7.



6. Black has the first Centre Pass at the start of a game.
- a) Which Umpire starts play? _____
 - b) Which Umpire would take a Toss Up at Point Z? _____
- White scores the first goal. Which Umpire is responsible for the following?
- c) Restarting play? _____
 - d) Penalising out of Court at Point F? _____ (2)
7. In the same game, the score is 14-11 to Black nearing the end of the first quarter.
- a) Which team has the next Centre pass? _____
 - b) If the Umpires disagree with a) who shall they appeal to? _____
 - c) At the end of the quarter, where should the two Umpires meet? _____
 - d) What is the length of this interval? _____ (2)
8. Name two circumstances when an Umpire could stop play for an Emergency.
- (i) _____
 - (ii) _____ (1)
9. Describe the type of whistle an Umpire would use in the following situations:
- a) 10 second warning _____
 - b) Start of play following stoppage _____
 - c) End of game _____
 - d) 30 second warning _____ (2)



**Question 10 requires you to circle your answer clearly - either True or False.
All questions are worth ½ mark.**

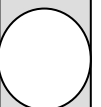
10.

- | | | |
|--|------|-------|
| a) Coaching can occur at the Side Line during any stoppage | True | False |
| b) A player may roll the ball to herself to gain possession | True | False |
| c) Both Umpires indicate the direction of play after a goal is scored | True | False |
| d) All penalties are awarded to a team | True | False |
| e) A player who is suspended must report to the Score Bench | True | False |
| f) A warning issued by one Umpire is not binding on the other Umpire | True | False |
| g) A GS can shoot for goal with her foot on the Goal Line | True | False |
| h) A team can take the Court with five players <u>excluding</u> a Centre | True | False |

(4 marks)

**Questions 11 – 17 are multi choice. There is only one correct option.
Please circle your answer clearly. All questions are worth one mark.**

11. Black GA runs behind the Goalpost. The Black GA jumps into the air from out of Court, catches the ball and lands on Court. What action would the Umpire take?
- a) Let play continue
 - b) Free Pass White in the Goal Circle where Black GA caught the ball and landed
 - c) Throw In White behind the Goal Line where Black GA jumped from out of Court
 - d) Penalty Pass White in the Goal Circle where Black GA caught the ball and landed
12. In the following situations, when would an Umpire award a Free Pass?
- a) Interference with the Goalpost at a shot at goal
 - b) Contact
 - c) Held Ball
 - d) Both a) and c) above
13. Black WA tips the ball twice before gaining possession. What is the infringement?
- a) Replayed ball Black WA
 - b) Two tips and a catch Black WA
 - c) Two bats and a catch Black WA
 - d) No infringement



14. Black GS catches the ball and lands astride the Goal Circle line. Black GS lifts her back foot and shoots successfully for goal. What action would the Umpire take?
- a) Free Pass White inside the Goal Circle where Black GS shot for goal. Discount goal.
 - b) Count the Goal. Let play continue.
 - c) Free Pass White outside the Goal Circle where Black GS landed. Discount goal.
 - d) Penalty Pass White outside the Goal Circle where Black GS landed. Discount goal.
15. White's Centre Pass is untouched in the Centre Third and is caught by Black GA who lands in the Goal Third. What action would the Umpire take?
- a) Let play continue
 - b) Free Pass Black in Goal Third near where the ball crossed the Transverse Line
 - c) Let play continue, advantage rule applies
 - d) Free Pass Black in Centre Third near where the ball crossed the Transverse Line
16. White C is penalised for Contact in Black's Goal Third. White C instructs White GK to move to defend the next pass. What action would the Umpire take?
- a) Let play continue
 - b) Penalty Pass Black where the original penalty was awarded
 - c) Free Pass Black closer to the edge of the Goal Circle
 - d) Free Pass Black where the original penalty was awarded
17. White GK and White GD catch the ball at the same time following an unsuccessful shot for goal. White GK quickly releases the ball and White GD passes to White C. What action would the Umpire take?
- a) Free Pass Black where White GK releases the ball
 - b) Free Pass Black where White GK and White GD caught the ball
 - c) Let play continue
 - d) Free Pass Black where White GD passed the ball to White C

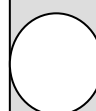
The remaining questions ask you to demonstrate a practical understanding of Rules, Protocols and Effective Game Management guidelines. Remember to state where any Penalty is to be taken.

18. Black C lands on the right foot. The C steps forward onto the left foot, then jumps forward onto the right foot before passing the ball.

Infringement: _____

Action: _____

_____ (2)



19. Black WD continually enters White Team's Goal Circle during the fourth quarter of the game. The Umpire has penalised the offside and also played advantage as appropriate to each situation.

Other than the discipline measures outlined in the Rules, name two other strategies the Umpire could use to effectively manage Black WD's behaviour:

i) _____

ii) _____ (2)

20. White GD, defending from the correct distance, jumps towards Black GA and lands within 0.9m. White GD still as her arms outstretched as Black GA shoots successfully for goal.

Infringement: _____

Action: _____

Explain the reason for your action: _____

_____ (3)

21. At White's Centre Pass, Black WA and White WD enter the Centre Third at the same time just before the whistle is blown. Black WA catches the ball and lands in the Centre Third.

Infringement: _____

Action: _____

Explain the reason for your action: _____

_____ (3)

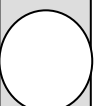
22. Black GS jumps for a rebound and lands on White GD who has moved in to the landing space of Black GS.

Infringement: _____

Action: _____

Explain the reason for your action: _____

_____ (3)



23. a) White WD is penalised for Contact on the edge of Black's Goal Circle. White WD disagrees with the decision and directs inappropriate comments at the Umpire. What action would the Umpire take?

b) In a different game, Black Team's Coach calls out inappropriate comments to the Umpire. What action would the Umpire take?

(2)

24. White GD takes a Throw In from behind the Goal Line. White C catches the ball in the Centre Third.

Infringement: _____

Action: _____

(2)

25. Black WA catches the ball in the Goal Third. White WD accidentally knocks Black WA causing her to drop the ball. Black GA picks up the ball inside the Goal Circle.

Infringement: _____

Action: _____

Explain the reason for your action: _____

(3)

26. White GS indicates to the Umpire that they are bleeding.

a) Where should the Umpires stand during this stoppage?

b) At the end of this stoppage, White GS is still bleeding. To allow play to continue, name two options the White team has:

c) Name two other requirements an Umpire must check before play restarts.

(3)

